

Operation Maths corrections

Page 58 & 60

A Colour the numerals. Use the colour key.

20s

40s

60s

80s

30s

50s

70s

90s

31 **94** 60 53 55 **46** 57
 52 37 80 95 79 47 45
 73 70 30 69 65 40 84
 48 21 63 75 27 23
 76 93 **37** 88 24 33 36
 32 97 54 64 24 33 **77**
 50 78 59 22 96
 83 61 90 43 28 44 74
 38 92 62 72 86 34 89 98

B Write the missing numbers.

1. 67 **68** 69 **70** **71** 72 **73** **74** **75**



2. 46 **47** **48** 49 **50** **51** **52** **53** **54**

3. 28 **29** **30** **31** **32** 33 **34** **35** **36**

4. **80** **81** **82** **83** **84** **85** **86** **87** **88** 99

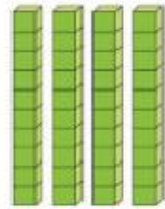


Place Value 2

I'm thinking of a number. Draw it using  and .

1. It is 10 more than 30.

The number is **40**.



4 tens **0** units

2. It is 5 less than 25.

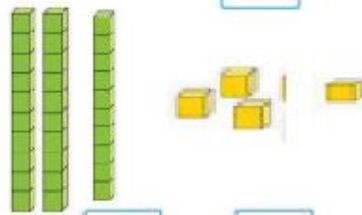
The number is **20**.



2 tens **0** units

3. It is 8 less than 42.

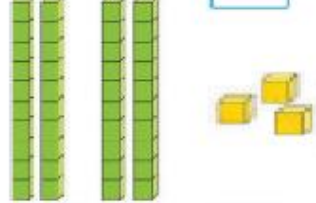
The number is **34**.



3 tens **4** units

4. It is 7 more than 36.

The number is **43**.



4 tens **3** units

5. It is 7 less than 36.

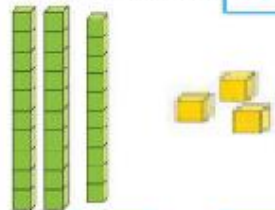
The number is **29**.



2 tens **9** units

6. It is 6 + 5 more than 22.

The number is **33**.



3 tens **3** units

